


12.10.20



Name

Write the missing numbers (1-50)

44			47		49
----	--	--	----	--	----

7				11	
---	--	--	--	----	--


32		34			37
----	--	----	--	--	----

	18				22
--	----	--	--	--	----

		30		32	
--	--	----	--	----	--

25			28		
----	--	--	----	--	--

12.10.20



Name

Write the missing numbers (1-20)

13				17		
----	--	--	--	----	--	--

	16			19		21
--	----	--	--	----	--	----


5				9		11
---	--	--	--	---	--	----

8		10			13	
---	--	----	--	--	----	--

3			6			9
---	--	--	---	--	--	---

	9			12		14
--	---	--	--	----	--	----

12.10.20



Name

Write the missing numbers (1-10)

2			5		7	
---	--	--	---	--	---	--

1		3		5		7
---	--	---	--	---	--	---

1	2			5		7
---	---	--	--	---	--	---

4			7		9	
---	--	--	---	--	---	--

3		5			8	
---	--	---	--	--	---	--